



# GYANODAYA GURUKUL

Affiliated to C.B.S.E., Delhi

Gola Road, Danapur, Patna – 801503

## Half Yearly Examination – (2019-20)

Class: - I  
Subject: - Math's

F.M.: - 80  
Duration: - 3 hr

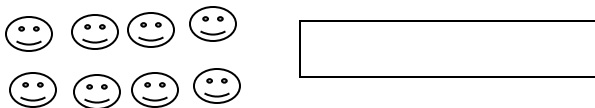
### General Instructions:-

- All questions are compulsory.
- Read the questions carefully and write the answers in the answer sheets provided.
- Do not answer the questions randomly. Attempt all the questions of one section before moving on to another section.
- Do not write anything on the question paper.

1. Write the number name of given numbers (1)

20 \_\_\_\_\_

2. Count and write (1)



3. Fill in the blanks (1)

12, 13, \_\_\_\_\_, \_\_\_\_\_

4. Colour to match the numbers as shown (1)



5. What comes before? (1)

\_\_\_\_\_, 8

6. What comes after? (1)

40 \_\_\_\_\_

7. What comes in between? (1)

19, , 21

8. Write >, < or = (1)

9, , 6

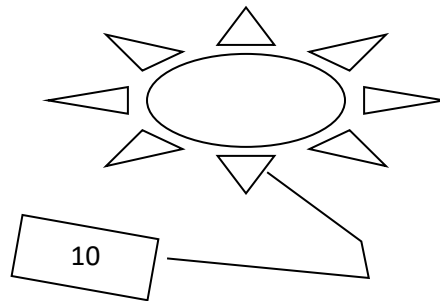

9. Write the number for the given number Name (1)

Seventeen =

10. Count and tick (✓) the correct number (1)



11. Draw the dots to match the numbers as shown. (2)



12. Follow the pattern and fill in the blanks (2)

a) 2, 4, \_\_\_\_\_, \_\_\_\_\_,

b) 22, 24, \_\_\_\_\_, \_\_\_\_\_,

13. Fill in..... (2)

a) The number before 11 is \_\_\_\_\_

b) The number after 19 is \_\_\_\_\_

14. Circle the largest numbers (2)

a) 13, 22, 19, 12, 24

b) 20, 12, 25, 19, 21

15. Count and add.

(2)

a)       

b)  +  =  +  =

16. Add it

(2)

a)  $4 + 4 =$

b)  $8 + 4 =$

17. Fill in the blanks

(2)

a)  $3 + 4 =$

b)  $4 - 0 =$

18. Subtract it

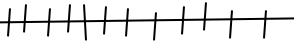
(2)

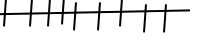
a)  $8 - 5 =$

b)  $6 - 2 =$

19. Do on the number line

(3)

a)    $5 + 4 =$  \_\_\_\_\_

b)    $3 + 5 =$  \_\_\_\_\_

20. Write in short forms

(3)

a)  $10 + 5 =$

b)  $20 + 2 =$

c)  $30 - 9 =$

21. Write in long forms

(3)

a)  $28 =$  \_\_\_\_\_

b)  $16 =$  \_\_\_\_\_

22. Write the order of the numbers in counting

(3)

a)  $1 =$  \_\_\_\_\_



29. Write in descending order. (5)

a) 98, 89, 32, 35 = \_\_\_\_\_

b) 67, 68, 35, 22 = \_\_\_\_\_

30. Write the order of the months. (5)

a) February \_\_\_\_\_

b) April \_\_\_\_\_

31. Write the order of the numbers from 1 to 5 (5)

1 = \_\_\_\_\_ 3 = \_\_\_\_\_ 5 = \_\_\_\_\_

2 = \_\_\_\_\_ 4 = \_\_\_\_\_

32. Write in long form and add. (5)

a)  $35 + 12 =$  \_\_\_\_\_

+

+  =  +  =