



GYANODAYA GURUKUL

Affiliated to C.B.S.E., Delhi

Gola Road, Danapur, Patna – 801503

Half Yearly Examination – (2019-20)

Name:-

Roll no:-

Class: - U.K.G

F.M.: - 80

Subject: - Math

Duration: - 3 hr

General Instructions:-

- All questions are compulsory.
- Read the questions carefully and write the answers in the answer sheets provided.
- Do not answer the questions randomly. Attempt all the questions of one section before moving on to another section.
- Do not write anything on the question paper.

Q.1>Write the table of 6

10

$6 \times 1 = \underline{\quad}$

$6 \times 2 = \underline{\quad}$

$6 \times 3 = \underline{\quad}$

$6 \times 4 = \underline{\quad}$

$6 \times 5 = \underline{\quad}$

$6 \times 6 = \underline{\quad}$

$6 \times 7 = \underline{\quad}$

$6 \times 8 = \underline{\quad}$

$6 \times 9 = \underline{\quad}$

$6 \times 10 = \underline{\quad}$

P.T.O

Q.2. Write what comes before and after:

10

a.) 2 b.) 6 c.) 9 d.) 12 e.) 15

f.) 18 g.) 21 h.) 25 i.) 29 j.) 32

Q.3.Fill in the blanks:

10

a) $4 \times 2 =$ b) $4 \times 4 =$ c) $4 \times 8 =$ d) $4 \times 10 =$ e) $5 \times 1 =$

f) $5 \times 3 =$ g) $5 \times 4 =$ h) $5 \times 6 =$ i) $5 \times 8 =$ j) $5 \times 9 =$

Q.4.Write number name 31 to 50

10

31- _____, 32- _____, 33- _____ 34- _____

35- _____ 36- _____ 37- _____ 38- _____

39- _____ 40- _____ 41- _____ 42- _____

43- _____ 44- _____ 45- _____ 46- _____

47- _____ 48- _____ 49- _____ 50- _____

Q.5.Write the number that comes between:

10

a) 4 6 b) 9 11 c) 13 15 d) 17 19 e) 20 22

f) 24 26 g) 28 30 h) 31 33 i) 35 37 j) 38 40

Q.6.Rearrange the numeral in correct order:

10

a) 9 , 8 , 5 , 4 , 7 , 6

_____, _____, _____, _____, _____, _____

b) 13 , 15 , 12 , 10 , 11 , 14

_____, _____, _____, _____, _____, _____

c) 24 , 22 , 20 , 21 , 23 , 25

_____, _____, _____, _____, _____, _____

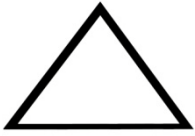
d) 36 , 34 , 35 , 39 , 37 , 38


_____, _____, _____, _____, _____, _____


P.T.O

Q.7. Write the name of shapes:

10









Q.8. Write ordinal numbers :

10

1- _____

6- _____

2- _____

7- _____

3- _____

8- _____

4- _____

9- _____

5- _____

10- _____

